

Prime Factors (A)

Use a tree diagram to find the prime factors of each number.

90

28

121

115

70

90

30

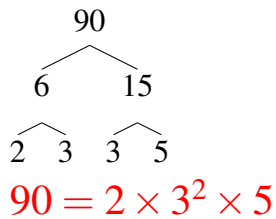
130

24

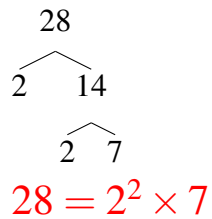
Prime Factors (A) Answers

Use a tree diagram to find the prime factors of each number.

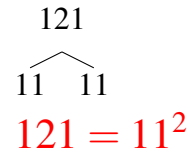
90



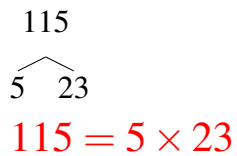
28



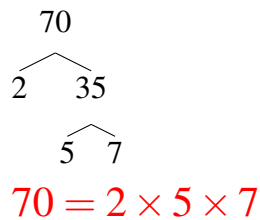
121



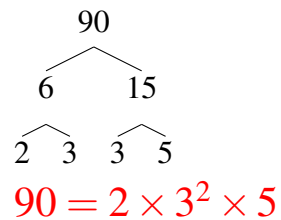
115



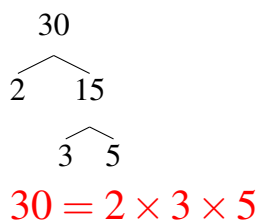
70



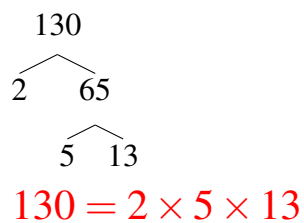
90



30



130



24

